









Tuesday 31st March

Good Morning Year 5! Thank you to those children who sent me work or contacted me on group chat. Don't forget you can send me work to look at and comment on at hworthington.airyhill@yeat.co.uk Don't forget to register you are home learning each day by writing hi in the group chat. Mrs Burns would still like children to join her classroom with the code qf3fnw7 – thank you!! Miss Worthington x

±

9:00 – 10 am		Maths arithmetic and new learning <i>If you have any questions or require any feedback please email me directly on hworthington.airyhill@yeat.co.uk</i>
10:00 – 10:30 am		Break and relax time
10:30 – 11:30 am		Daily English activity in your books + reading of a book <i>If you have any questions or require any feedback please email me directly on hworthington.airyhill@yeat.co.uk</i>
11:30 – 1:00pm		Lunch time and relax time
1:00 – 1:30 pm		Practise times tables / spellings / reading of a book
1:30 – 2:00pm		Daily Joe Wicks PE lesson (this will support your physical and mental health – we know how important this is!) https://www.youtube.com/channel/UCAxW1XT0iEJo0TYIRfn6rYQ
2:00- 2:30pm		Break and relax time
2:30 – 3:30pm		Wider learning activity (choose from an activity set by the class teacher each day or an activity planned by a parent / carer. This might be topic based or something to do around your house)

□

Calculation: (You may use the calculator provided to check your answers)

$$735 \times 24 =$$

What is half of 533?

What is 10 squared?

What is 8 cubed?

$$6.8 + 3.2 =$$

674 divided by 4

$$24,653 + 4,753$$

$$63,863 - 1,000$$

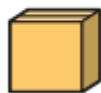
Maths – Rounding Decimals.

We are going to continue our learning on rounding decimals. This carries on from yesterday's learning. **Please watch the Week 2 Lesson 1 Step 6 video again** – this will help you again. Today we are going to focus on problem solving and reasoning questions which are questions that are going to make us think. Here is the link...

<https://whiterosemaths.com/homelearning/year-5/>

6

Here are the weights in kilograms of some parcels.



3.48 kg



1.42 kg



10.65 kg



1.03 kg

a) Round the weight of each parcel to 1 decimal place.

kg kg kg kg

b) The weight of each parcel has been rounded to the nearest 100g.

Is this true or false? _____

Talk about it with a partner.

7 Amir is thinking of a number.

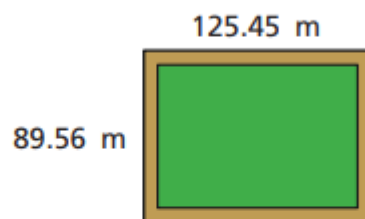
Rounded to the nearest whole his number is 5

Rounded to the nearest tenth his number is 4.8

Write at least four different numbers that Amir could be thinking of.

8 A farmer is building a new fence for her sheep field.

Here are the measurements.



She wants to build a fence around the whole field.

Estimate how much fencing you think she will need.

Talk about your estimate with a partner.

English Writing Task

Please complete your writing tasks in your books or type on a google docs using your Chrome Books.

Welcome To Whitby!



Create a piece of writing persuading your reader that Whitby is the perfect place to come on holiday (after lockdown). If you use Google Docs you may include photos that you've copied in of your town.

Things to include:

- Really good sentence types e.g. modal verbs/relative clauses/parenthesis/fronted adverbials/conjunctions...
- Some of your favourite places to visit in Whitby - make your reader want to go by using great word choices.....e.g.

Here is a copied section from the "Visit Whitby" website to give you an idea of "what a good one looks like."



Whitby lighthouses

📅 March 6, 2020 February 27, 2020 👤 Beth Ellin

Our coastline has been watched over and protected by the Whitby lighthouses for hundreds of years. They've stood helping fishermen safely come into harbour as they brave the changeable North Sea.

With the new footbridge over to East Pier, it's never been a better time to explore the harbour and the lighthouses that safely guide boats and their cargo back into town. When you do, we thought you might like a little bit more knowledge about our lighthouses.

You can think of 5 or 6 different places in Whitby you think visitors would like to see and visit.